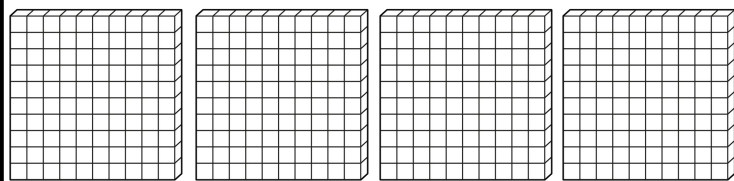


Name: \_\_\_\_\_

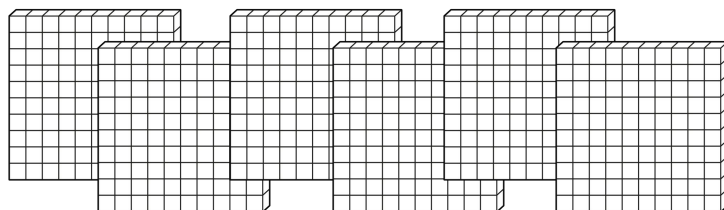
# 100 Place Value



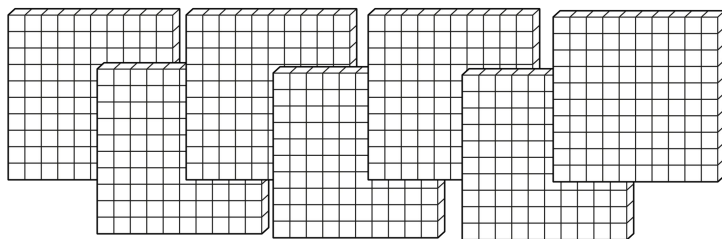
Directions: Count each set. Write the number word and standard form.



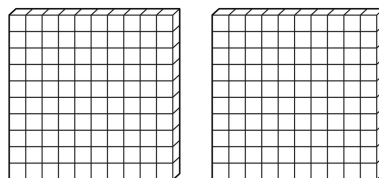
four hundred  
400



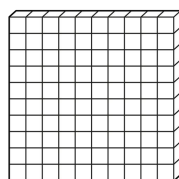
\_\_\_\_\_ hundred  
\_\_\_\_\_



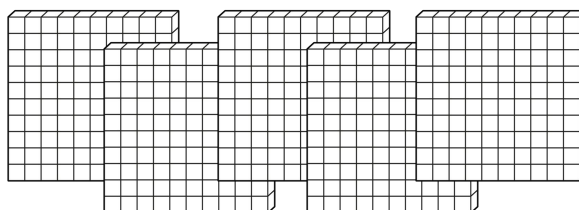
\_\_\_\_\_ hundred  
\_\_\_\_\_



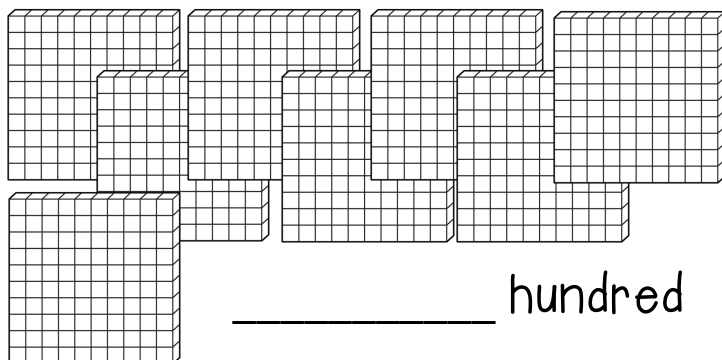
\_\_\_\_\_ hundred  
\_\_\_\_\_



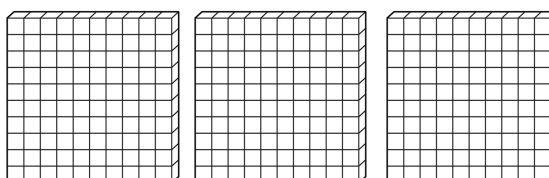
\_\_\_\_\_ hundred  
\_\_\_\_\_



\_\_\_\_\_ hundred  
\_\_\_\_\_



\_\_\_\_\_ hundred  
\_\_\_\_\_

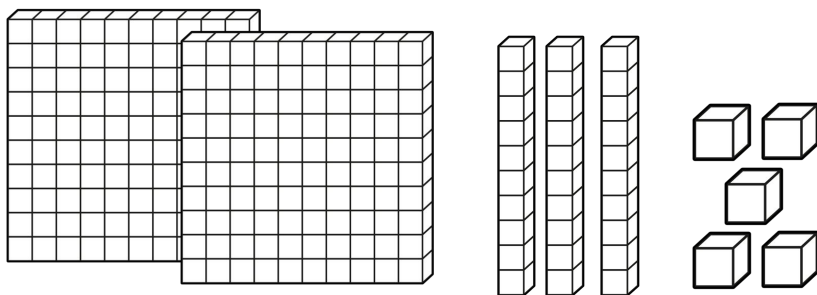



\_\_\_\_\_ hundred  
\_\_\_\_\_

Name: \_\_\_\_\_

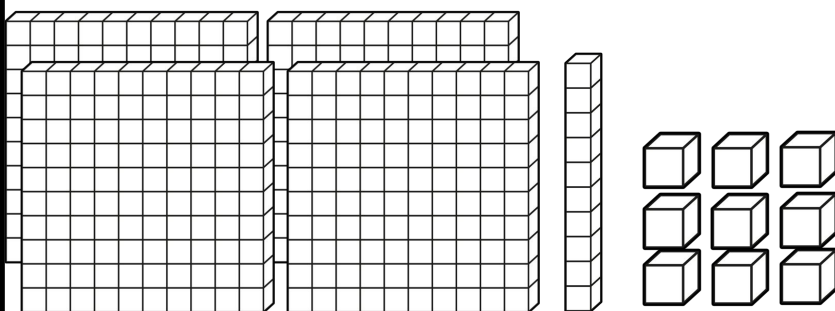
# Place Value

Directions: Count the hundreds, tens and ones in each group.  
Write the value for each number and the total value.



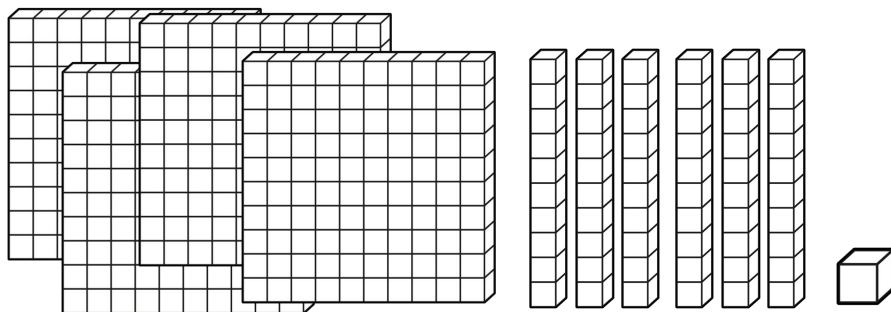
Hundreds	Tens	Ones

\_\_\_\_\_ in all



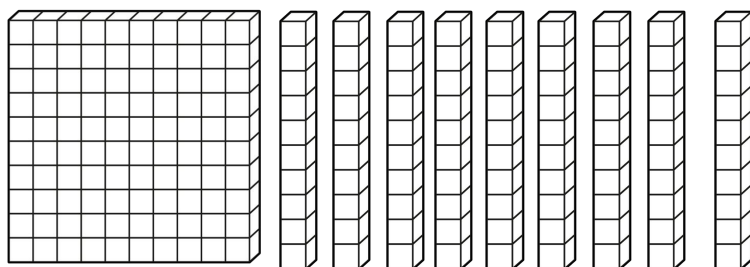
Hundreds	Tens	Ones

\_\_\_\_\_ in all



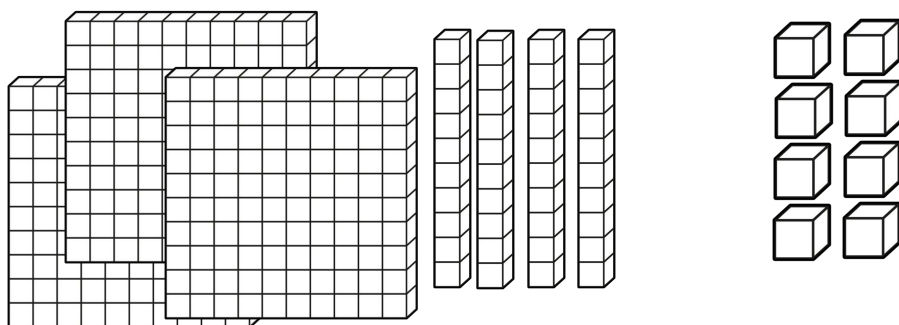
Hundreds	Tens	Ones

\_\_\_\_\_ in all



Hundreds	Tens	Ones

\_\_\_\_\_ in all



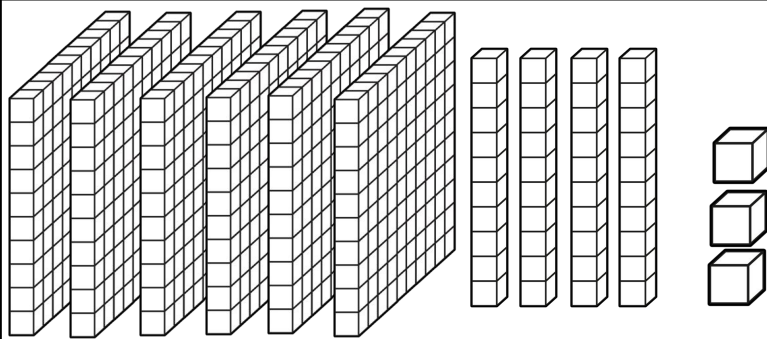

Hundreds	Tens	Ones

\_\_\_\_\_ in all

Name: \_\_\_\_\_

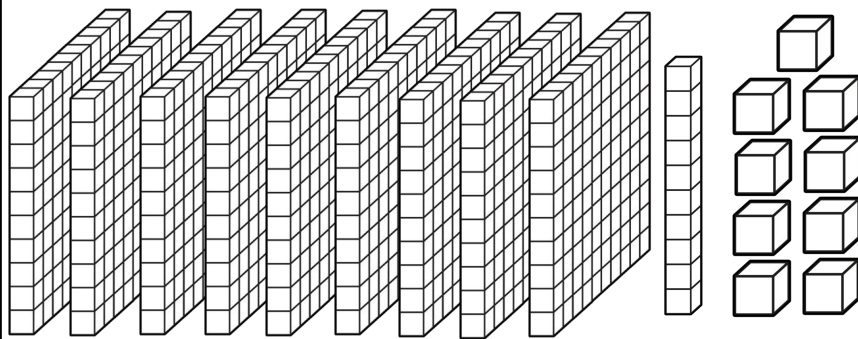
# Place Value II

Directions: Count the hundreds, tens and ones in each group.  
Write the value for each number and the total value.



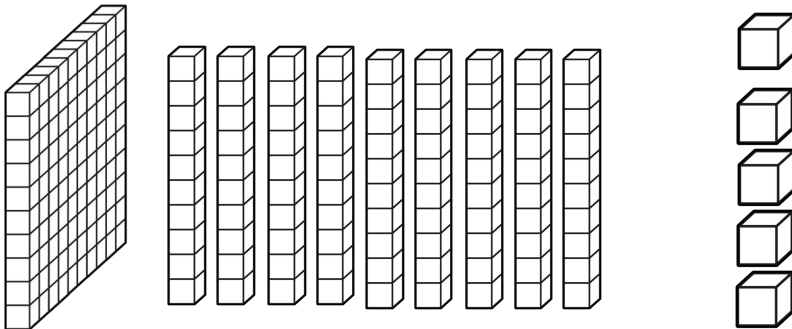
Hundreds	Tens	Ones

\_\_\_\_\_ in all



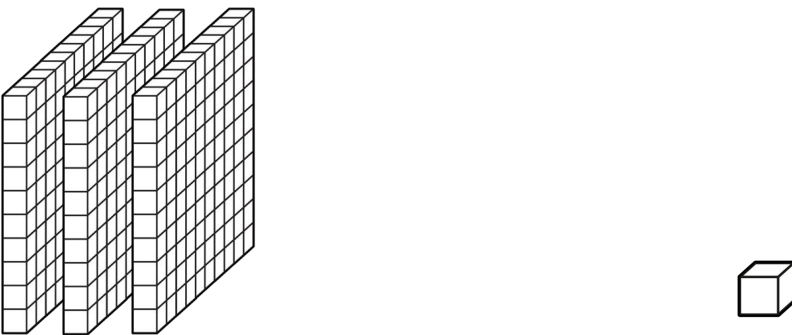
Hundreds	Tens	Ones

\_\_\_\_\_ in all



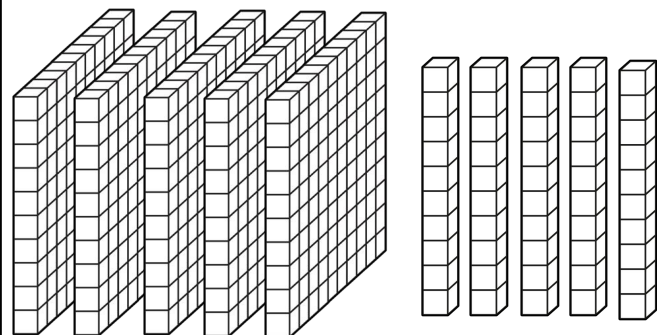
Hundreds	Tens	Ones

\_\_\_\_\_ in all



Hundreds	Tens	Ones

\_\_\_\_\_ in all




Hundreds	Tens	Ones

\_\_\_\_\_ in all

Name: \_\_\_\_\_

# Expanded Form



Directions: Fill in the chart below to show how many hundreds, tens and ones. The first one has been done for you.

Hundreds  
Tens  
Ones

 **234** 

200 + 30 + 4

 **513** 

 **673** 

 **947** 

 **682** 

 **870** 

 **701** 

 **457** 

 **198** 

 **355** 

Name: \_\_\_\_\_

# Expanded Form



Directions: Cut and paste the correct expanded form to the correct number.

Bonus: Color the odd cones brown and color the even cones yellow.

Paste  
Here

56

Paste  
Here

22

Paste  
Here

44

Paste  
Here

78

Paste  
Here

37

Paste  
Here

19

Paste  
Here

95

Paste  
Here

63

Directions: Write the expanded form for each set of numbers.

1.  $66 =$  \_\_\_\_\_

2.  $82 =$  \_\_\_\_\_

3.  $30 =$  \_\_\_\_\_

4.  $99 =$  \_\_\_\_\_



©Annie Moffatt @ The Moffatt Girls 2014

$60 + 3$

$50 + 6$

$40 + 4$

$90 + 5$

$20 + 2$

$10 + 9$

$30 + 7$

$70 + 8$